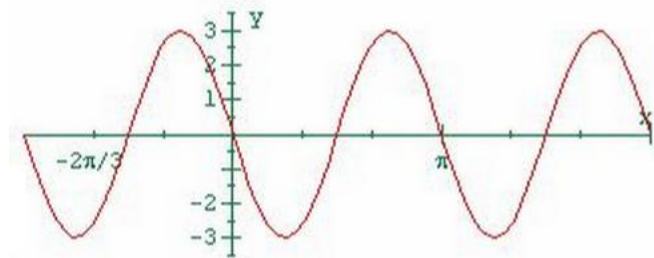
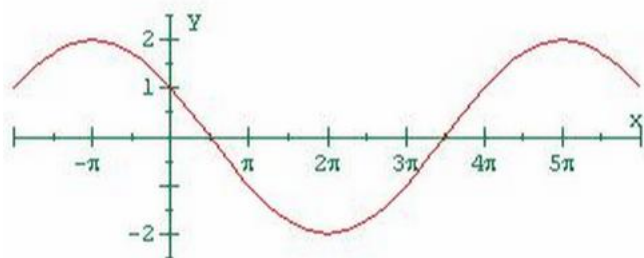


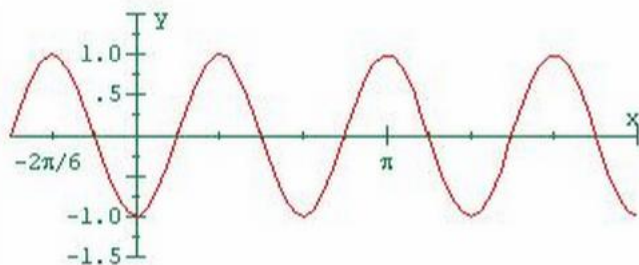
- 1.) Write the **sine** function of the given graph. Box the period you used to write your function.



- 2.) Write the **cosine** function of the given graph. Box the period you used to write your function.



- 3.) Write the **cosine** function of the given graph. Box the period you used to write your function.



- 4.) Write the **sine** function of the given graph. Box the period you used to write your function.

